



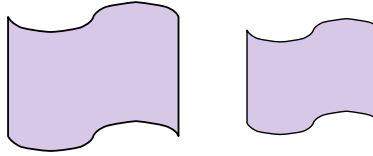
Determine if the shapes shown are 'similar', 'congruent' or 'neither'.

Answers

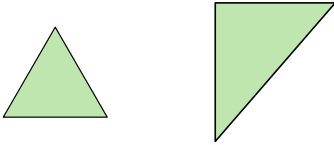
1)



2)



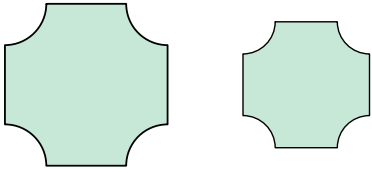
3)



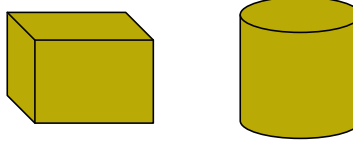
4)



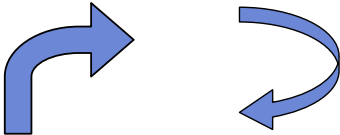
5)



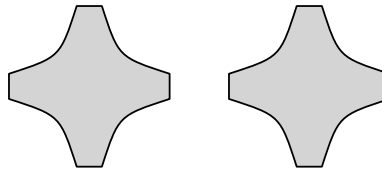
6)



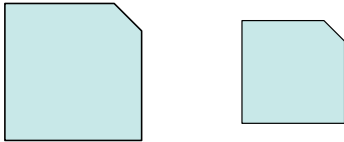
7)



8)




9)



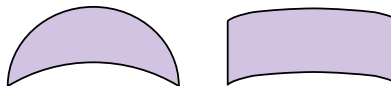
10)



11)



12)




13)



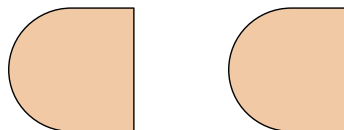
14)



15)



16)



1. \_\_\_\_\_

2. \_\_\_\_\_

3. \_\_\_\_\_

4. \_\_\_\_\_

5. \_\_\_\_\_

6. \_\_\_\_\_

7. \_\_\_\_\_

8. \_\_\_\_\_

9. \_\_\_\_\_

10. \_\_\_\_\_

11. \_\_\_\_\_

12. \_\_\_\_\_

13. \_\_\_\_\_

14. \_\_\_\_\_

15. \_\_\_\_\_

16. \_\_\_\_\_

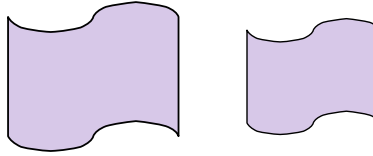


Determine if the shapes shown are 'similar', 'congruent' or 'neither'.

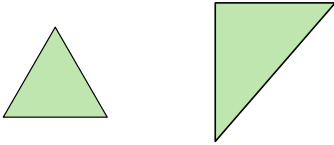
1)




2)



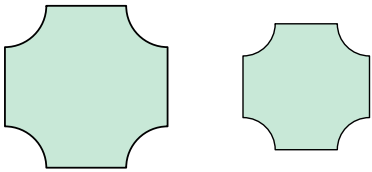
3)



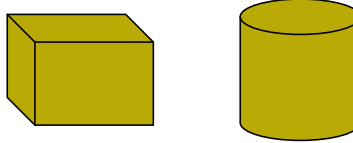
4)



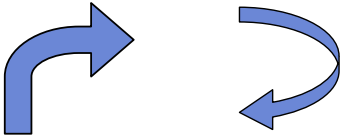
5)



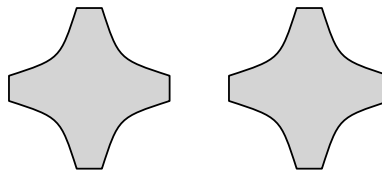
6)



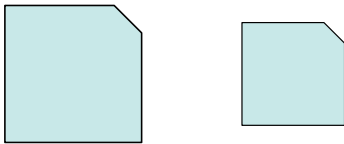
7)



8)




9)



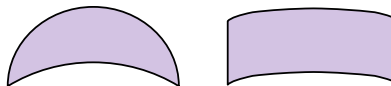
10)



11)




12)




13)



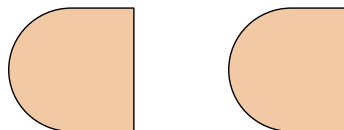
14)



15)



16)



Answers

1. neither

2. similar

3. neither

4. neither

5. similar

6. neither

7. neither

8. congruent

9. similar

10. congruent

11. similar

12. neither

13. congruent

14. similar

15. similar

16. congruent